
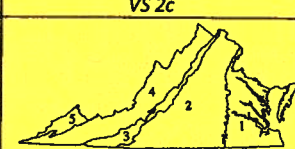
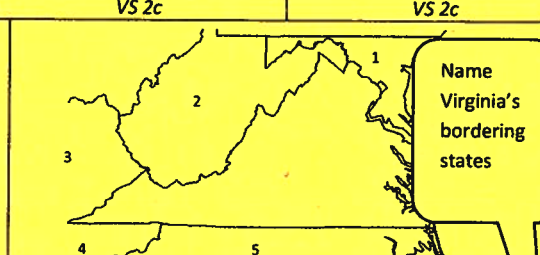

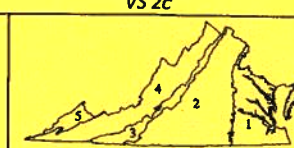
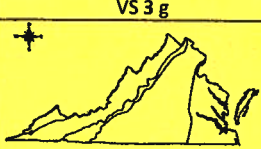


## Daily Virginia Studies Review #1

<b>Monday</b>	<p>Each of the 4 rivers of Virginia were</p> <p>a – a source of food b – a pathway for exploration c- both a and b d – none of these</p> <p style="text-align: right;">VS 2c</p>	<p>The four major rivers that flow into the _____</p> <p>and are separated by _____</p>  <p style="text-align: center;">VS 2c</p>	<p>This is a natural border between the Coastal Plain (Tidewater) and Piedmont regions, where the land rises sharply and waterfalls prevent further travel on the river.</p> <p>_____</p> <p style="text-align: right;">VS 2c</p>	<p>This lake is located in the Coastal Plain region. It is surrounded by the Dismal Swamp.</p> <p>_____</p> <p style="text-align: right;">VS 2c</p>
<b>Tuesday</b>	 <p>The region marked 2 is _____</p> <p style="text-align: right;">VS 2b</p>	 <p style="text-align: center;">VS 2b</p> <p>1 _____ 2 _____ 3 _____ 4 _____ 5 _____</p>	<p>Name _____ River</p> <p>- Flows into the Chesapeake Bay</p> <p>- Yorktown and is located on this river</p> <p style="text-align: right;">VS 2c</p>	<p style="text-align: right;">Name Virginia's bordering states</p>
<b>Wednesday</b>	<p>Name 2 ways the native peoples aided in the survival of the Jamestown settlers:</p> <p>_____</p> <p>_____</p> <p style="text-align: right;">VS 3 g</p>	 <p style="text-align: center;">VS 2c</p> <p>- located in the Coastal Plain - Surrounds Lake Drummond - has a variety of wildlife</p>	<p>The _____ separates the Eastern Shore from the mainland of Virginia.</p> <p style="text-align: right;">VS 2c</p>	 <p>Name the region marked 3 in the map</p> <p>_____</p> <p style="text-align: right;">VS 2a</p>
<b>Thursday</b>	 <p>Circle the Coastal Plain on the map above.</p> <p style="text-align: right;">VS 2b</p>	<p>Why did many early Virginia cities develop along the Fall Line?</p> <p>_____</p> <p>_____</p> <p style="text-align: right;">VS 2b</p>	<p>Who initiated trading relationships with the native peoples in Jamestown?</p> <p>_____</p> <p style="text-align: right;">VS 3g</p>	<p>_____ River</p> <p>- Flows into the Chesapeake Bay</p> <p>- Fredericksburg is located on this river</p> <p style="text-align: right;">VS 2c</p>

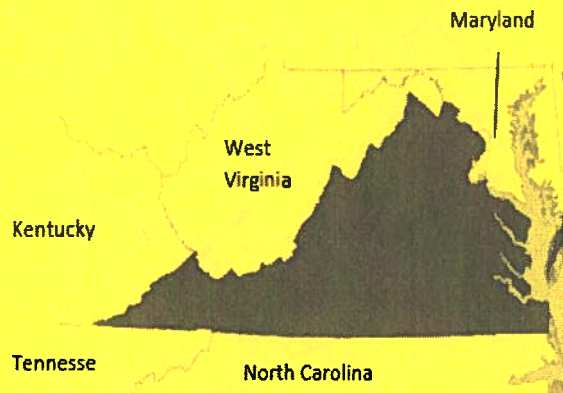


## VS 2A Locating Virginia and Its Bordering States

Relative location may be described by using terms that show connections between two places, such as *next to*, *near*, and *bordering*.

### Bordering bodies of water

- Atlantic Ocean
- Chesapeake Bay



### Bordering states

- Maryland
- West Virginia
- Kentucky
- Tennessee
- North Carolina

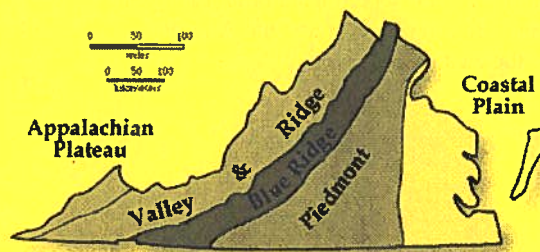
## VS 2B Virginia's Regions

### Terms to know

- **Fall Line:** The natural border between the Coastal Plain (Tidewater) and Piedmont regions, where waterfalls prevent further travel on the river
- **plateau:** Area of elevated land that is flat on top

### Geographic regions

- Coastal Plain (Tidewater)
  - Flat land
  - Located near Atlantic Ocean and Chesapeake Bay (includes the Eastern Shore)
  - East of the Fall Line
- Piedmont (“at the foot of mountains”)
  - Rolling hills
  - West of the Fall Line
- Blue Ridge Mountains
  - Old, rounded mountains
  - Part of the Appalachian mountain system
  - Located between the Piedmont and Valley and Ridge regions
  - Source of many rivers
- Valley and Ridge
  - Includes the Great Valley of Virginia and other valleys separated by ridges (the Blue Ridge Mountains and the Valley and Ridge regions are part of the Appalachian mountain system)
  - Located west of the Blue Ridge Mountains
- Appalachian Plateau
  - Located in Southwest Virginia
  - Only a small part of the plateau located in Virginia



## VS 2C Virginia's Water Features

### Term to know

- **peninsula:** A piece of land bordered by water on three sides

### Water features

- Atlantic Ocean
  - Provided transportation links between Virginia and other places (e.g., Europe, Africa, Caribbean)
- Chesapeake Bay
  - Provided a safe harbor
  - Was a source of food and transportation
- James River
  - Flows into the Chesapeake Bay
  - Richmond and Jamestown located along the James River
- York River
  - Flows into the Chesapeake Bay
  - Yorktown located along the York River
- Potomac River
  - Flows into the Chesapeake Bay
  - Alexandria located along the Potomac River
- Rappahannock River
  - Flows into the Chesapeake Bay
  - Fredericksburg located on the Rappahannock River
- Lake Drummond
  - Located in the Coastal Plain (Tidewater) region
  - Shallow natural lake surrounded by the Dismal Swamp
- Dismal Swamp
  - Located in the Coastal Plain (Tidewater) region
  - Variety of wildlife

Each river was a source of food and provided a pathway for exploration and settlement of Virginia.

The Eastern Shore is a peninsula bordered by the Chesapeake Bay to the west and the Atlantic Ocean to the east.

