



Name \_\_\_\_\_

Write a fraction and a decimal that represent the shaded part of each model.




fraction \_\_\_\_\_

decimal \_\_\_\_\_




fraction \_\_\_\_\_

decimal \_\_\_\_\_



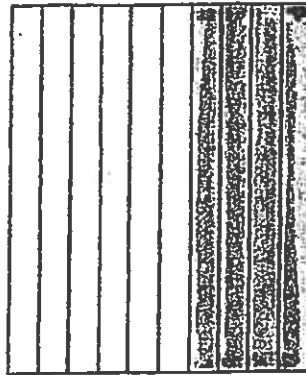
fraction \_\_\_\_\_

decimal \_\_\_\_\_




fraction \_\_\_\_\_

decimal \_\_\_\_\_




fraction \_\_\_\_\_

decimal \_\_\_\_\_




fraction \_\_\_\_\_

decimal \_\_\_\_\_



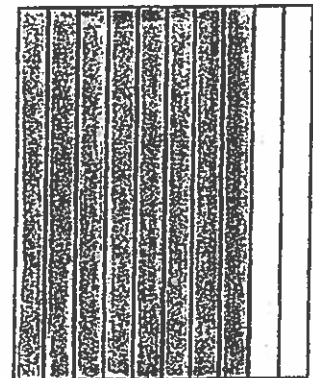
fraction \_\_\_\_\_

decimal \_\_\_\_\_



fraction \_\_\_\_\_

decimal \_\_\_\_\_



fraction \_\_\_\_\_

decimal \_\_\_\_\_