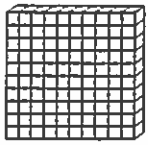


Name _____ Date _____

Base Ten Decimals



= 1 whole



= $\frac{1}{10}$
or 0.1

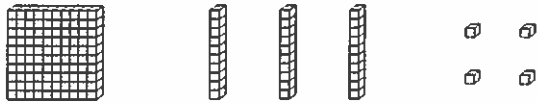


= $\frac{1}{100}$
or 0.01

Base ten blocks can also be used to show decimals. A flat equals one whole. It can be broken into ten rods, each equaling one tenth of the whole. A rod can be broken into ten blocks, each equaling one hundredth of the flat.

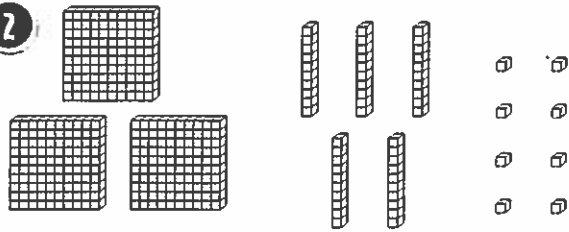
Write the decimal number for each set of blocks.

1



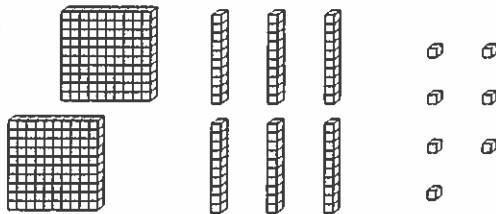
Number _____

2



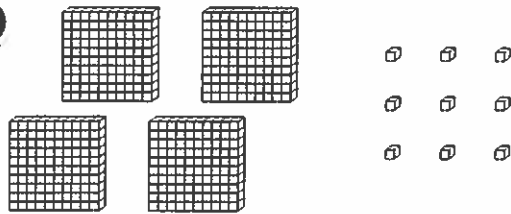
Number _____

3



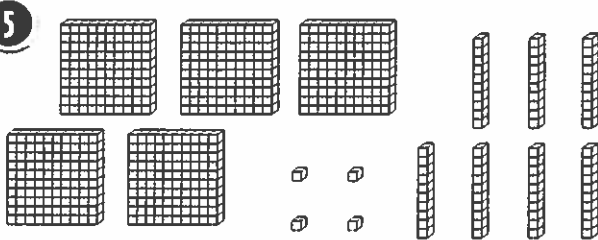
Number _____

4



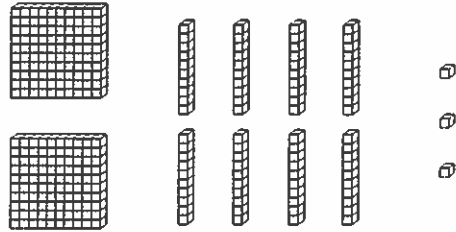
Number _____

5



Number _____

6



Number _____