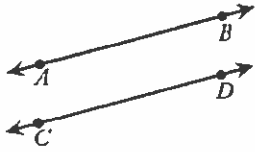


Name: _____

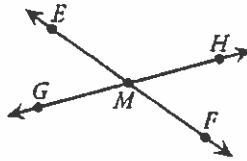
Parallel, Intersecting, and Perpendicular

Parallel Lines



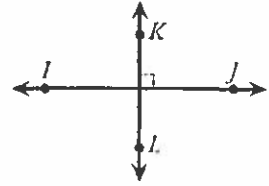
\overleftrightarrow{AB} and \overleftrightarrow{CD} are **parallel lines**. They never cross, even if they are extended.

Intersecting Lines



\overleftrightarrow{EF} and \overleftrightarrow{GH} are **intersecting lines**. They cross each other at point M .

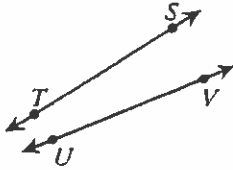
Perpendicular Lines



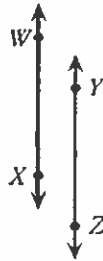
\overleftrightarrow{IJ} and \overleftrightarrow{KL} are **perpendicular lines**. They form right angles where they cross.

Write **parallel** or **not parallel** for each.

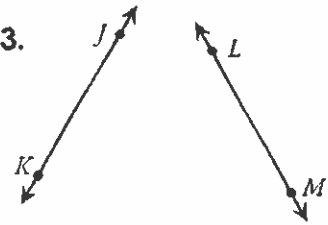
1.



2.

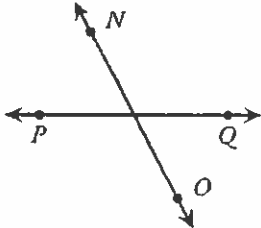


3.

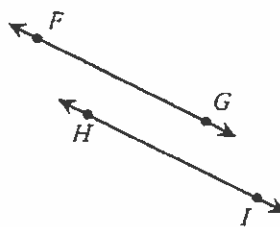


Write **parallel**, **intersecting**, or **perpendicular** for each.

4.



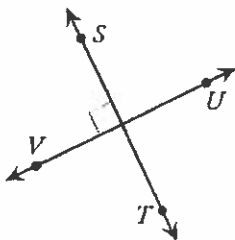
5.



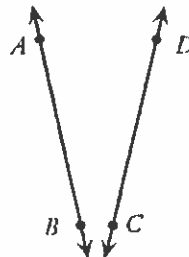
6.



7.



8.



9.

