


Name: _____

Decimals: Hundredths and Tenths

Write the decimal _____ of each shaded part.

a.




0.2

b.




0.5

c.




0.25

d.




0.1

e.



0.25

f.




0.2

g.




0.5

h.



0.2

i.




0.01

j.




0.25

k.



0.25

l.



0.5